



Determine which letter best represents the weight.

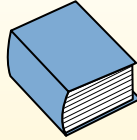
Gram (g)

A gram is about the weight of a paperclip.



Kilogram (kg)

A kilogram is about the weight of a thick book.



Remember:

Kilo means 1,000. So a kilogram is 1,000 grams.
1 Kilogram is also about the same weight as 2 pounds.

Answers

1. _____
2. _____
3. _____
4. _____
5. _____
6. _____
7. _____
8. _____
9. _____

1)



Popcorn

- A. 100 grams
- B. 1 gram
- C. 1 kilogram
- D. 100 kilograms

2)



Pen

- A. 5 grams
- B. 500 grams
- C. 5000 grams
- D. 5 kilograms

3)



DVD

- A. 1 gram
- B. 15 grams
- C. 15 kilograms
- D. 1 kilogram

4)



Spoon

- A. 25 grams
- B. 3 kilograms
- C. 3 grams
- D. 500 kilograms

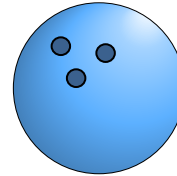
5)



Baseball Cap

- A. 85 grams
- B. 5 kilograms
- C. 200 kilograms
- D. 3 grams

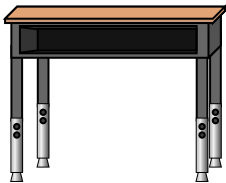
6)



Bowling Ball

- A. 90 kilograms
- B. 50 kilograms
- C. 7 kilograms
- D. 200 grams

7)



Desk

- A. 15 kilograms
- B. 300 grams
- C. 15 grams
- D. 300 kilograms


8)



Broom

- A. 10 kilograms
- B. 200 kilograms
- C. 10 grams
- D. 500 grams

9)



Apple

- A. 200 kilograms
- B. 5 kilograms
- C. 200 grams
- D. 5 grams



Determine which letter best represents the weight.

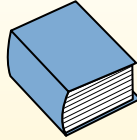
Gram (g)

A gram is about the weight of a paperclip.



Kilogram (kg)

A kilogram is about the weight of a thick book.




Remember:

Kilo means 1,000. So a kilogram is 1,000 grams.
1 Kilogram is also about the same weight as 2 pounds.

Answers

1)



Popcorn

- A. 100 grams
- B. 1 gram
- C. 1 kilogram
- D. 100 kilograms

2)



Pen

- A. 5 grams
- B. 500 grams
- C. 5000 grams
- D. 5 kilograms

3)



DVD

- A. 1 gram
- B. 15 grams
- C. 15 kilograms
- D. 1 kilogram

4)



Spoon

- A. 25 grams
- B. 3 kilograms
- C. 3 grams
- D. 500 kilograms

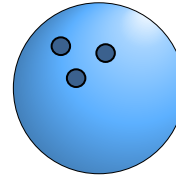
5)



Baseball Cap

- A. 85 grams
- B. 5 kilograms
- C. 200 kilograms
- D. 3 grams

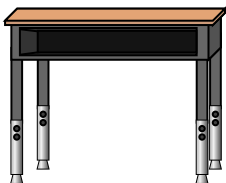
6)



Bowling Ball

- A. 90 kilograms
- B. 50 kilograms
- C. 7 kilograms
- D. 200 grams

7)



Desk

- A. 15 kilograms
- B. 300 grams
- C. 15 grams
- D. 300 kilograms


8)



Broom

- A. 10 kilograms
- B. 200 kilograms
- C. 10 grams
- D. 500 grams

9)



Apple

- A. 200 kilograms
- B. 5 kilograms
- C. 200 grams
- D. 5 grams

- 1. **B**
- 2. **A**
- 3. **B**
- 4. **A**
- 5. **A**
- 6. **C**
- 7. **A**
- 8. **D**
- 9. **C**